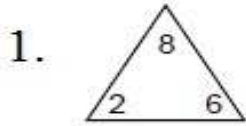


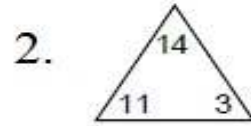
Fact family worksheet-3

Name _____

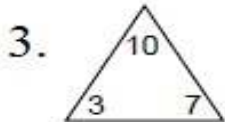
Add or subtract using the same three numbers. The first one is done for you.



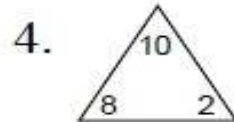
$$\begin{array}{r} \boxed{2} + \boxed{6} = \boxed{8} \\ \boxed{6} + \boxed{2} = \boxed{8} \\ \boxed{8} - \boxed{2} = \boxed{6} \\ \boxed{8} - \boxed{6} = \boxed{2} \end{array}$$



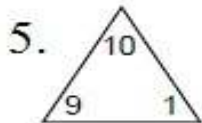
$$\begin{array}{r} \square + \square = \square \\ \square + \square = \square \\ \square - \square = \square \\ \square - \square = \square \end{array}$$



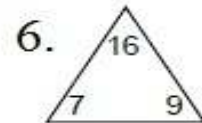
$$\begin{array}{r} \square + \square = \square \\ \square + \square = \square \\ \square - \square = \square \\ \square - \square = \square \end{array}$$



$$\begin{array}{r} \square + \square = \square \\ \square + \square = \square \\ \square - \square = \square \\ \square - \square = \square \end{array}$$

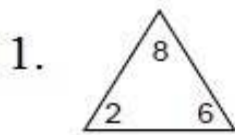


$$\begin{array}{r} \square + \square = \square \\ \square + \square = \square \\ \square - \square = \square \\ \square - \square = \square \end{array}$$



$$\begin{array}{r} \square + \square = \square \\ \square + \square = \square \\ \square - \square = \square \\ \square - \square = \square \end{array}$$

Fact family worksheet-3 answers

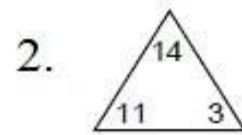


$$\boxed{2} + \boxed{6} = \boxed{8}$$

$$\boxed{6} + \boxed{2} = \boxed{8}$$

$$\boxed{8} - \boxed{2} = \boxed{6}$$

$$\boxed{8} - \boxed{6} = \boxed{2}$$

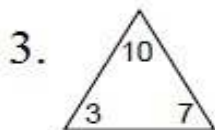


$$\boxed{11} + \boxed{3} = \boxed{14}$$

$$\boxed{3} + \boxed{11} = \boxed{14}$$

$$\boxed{14} - \boxed{11} = \boxed{3}$$

$$\boxed{14} - \boxed{3} = \boxed{11}$$

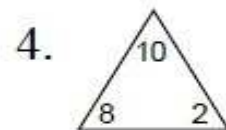


$$\boxed{3} + \boxed{7} = \boxed{10}$$

$$\boxed{7} + \boxed{3} = \boxed{10}$$

$$\boxed{10} - \boxed{3} = \boxed{7}$$

$$\boxed{10} - \boxed{7} = \boxed{3}$$

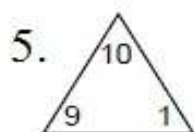


$$\boxed{8} + \boxed{2} = \boxed{10}$$

$$\boxed{2} + \boxed{8} = \boxed{10}$$

$$\boxed{10} - \boxed{8} = \boxed{2}$$

$$\boxed{10} - \boxed{2} = \boxed{8}$$

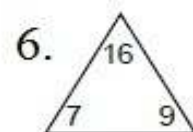


$$\boxed{9} + \boxed{1} = \boxed{10}$$

$$\boxed{1} + \boxed{9} = \boxed{10}$$

$$\boxed{10} - \boxed{9} = \boxed{1}$$

$$\boxed{10} - \boxed{1} = \boxed{9}$$



$$\boxed{7} + \boxed{9} = \boxed{16}$$

$$\boxed{9} + \boxed{7} = \boxed{16}$$

$$\boxed{16} - \boxed{7} = \boxed{9}$$

$$\boxed{16} - \boxed{9} = \boxed{7}$$