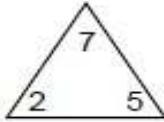


# Fact family worksheet-5

Name \_\_\_\_\_

Add or subtract using the same three numbers. The first one is done for you.

1.



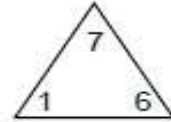
$$\boxed{2} + \boxed{5} = \boxed{7}$$

$$\boxed{5} + \boxed{2} = \boxed{7}$$

$$\boxed{7} - \boxed{2} = \boxed{5}$$

$$\boxed{7} - \boxed{5} = \boxed{2}$$

2.



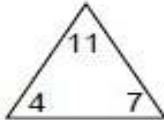
$$\boxed{1} + \boxed{6} = \boxed{7}$$

$$\boxed{6} + \boxed{1} = \boxed{7}$$

$$\boxed{7} - \boxed{1} = \boxed{6}$$

$$\boxed{7} - \boxed{6} = \boxed{1}$$

3.



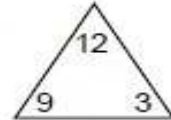
$$\boxed{4} + \boxed{7} = \boxed{11}$$

$$\boxed{7} + \boxed{4} = \boxed{11}$$

$$\boxed{11} - \boxed{7} = \boxed{4}$$

$$\boxed{11} - \boxed{4} = \boxed{7}$$

4.



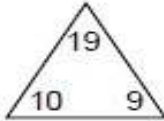
$$\boxed{9} + \boxed{3} = \boxed{12}$$

$$\boxed{3} + \boxed{9} = \boxed{12}$$

$$\boxed{12} - \boxed{9} = \boxed{3}$$

$$\boxed{12} - \boxed{3} = \boxed{9}$$

5.



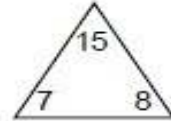
$$\boxed{10} + \boxed{9} = \boxed{19}$$

$$\boxed{9} + \boxed{10} = \boxed{19}$$

$$\boxed{19} - \boxed{10} = \boxed{9}$$

$$\boxed{19} - \boxed{9} = \boxed{10}$$

6.



$$\boxed{7} + \boxed{8} = \boxed{15}$$

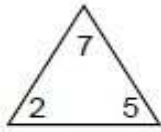
$$\boxed{8} + \boxed{7} = \boxed{15}$$

$$\boxed{15} - \boxed{7} = \boxed{8}$$

$$\boxed{15} - \boxed{8} = \boxed{7}$$

## Fact family worksheet-5 answers

1.



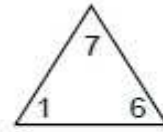
$$\boxed{2} + \boxed{5} = \boxed{7}$$

$$\boxed{5} + \boxed{2} = \boxed{7}$$

$$\boxed{7} - \boxed{2} = \boxed{5}$$

$$\boxed{7} - \boxed{5} = \boxed{2}$$

2.



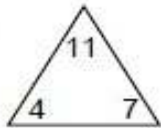
$$\boxed{1} + \boxed{6} = \boxed{7}$$

$$\boxed{6} + \boxed{1} = \boxed{7}$$

$$\boxed{7} - \boxed{1} = \boxed{6}$$

$$\boxed{7} - \boxed{6} = \boxed{1}$$

3.



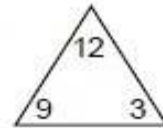
$$\boxed{4} + \boxed{7} = \boxed{11}$$

$$\boxed{7} + \boxed{4} = \boxed{11}$$

$$\boxed{11} - \boxed{7} = \boxed{4}$$

$$\boxed{11} - \boxed{4} = \boxed{7}$$

4.



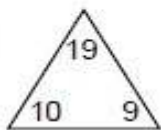
$$\boxed{9} + \boxed{3} = \boxed{12}$$

$$\boxed{3} + \boxed{9} = \boxed{12}$$

$$\boxed{12} - \boxed{9} = \boxed{3}$$

$$\boxed{12} - \boxed{3} = \boxed{9}$$

5.



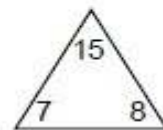
$$\boxed{10} + \boxed{9} = \boxed{19}$$

$$\boxed{9} + \boxed{10} = \boxed{19}$$

$$\boxed{19} - \boxed{10} = \boxed{9}$$

$$\boxed{19} - \boxed{9} = \boxed{10}$$

6.



$$\boxed{7} + \boxed{8} = \boxed{15}$$

$$\boxed{8} + \boxed{7} = \boxed{15}$$

$$\boxed{15} - \boxed{7} = \boxed{8}$$

$$\boxed{15} - \boxed{8} = \boxed{7}$$