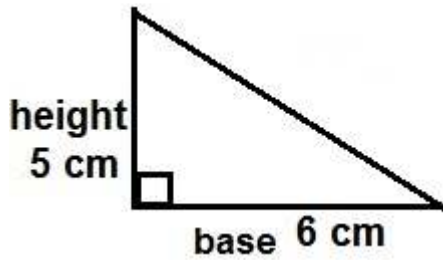
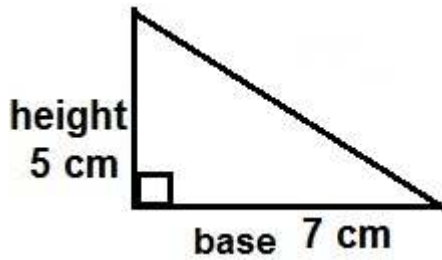


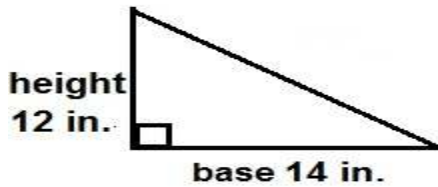
Find the area of each triangle worksheet 4



Area= \_\_\_\_\_



Area \_\_\_\_\_

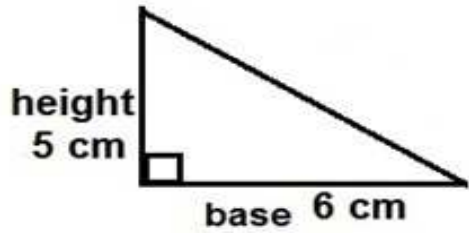


Area \_\_\_\_\_

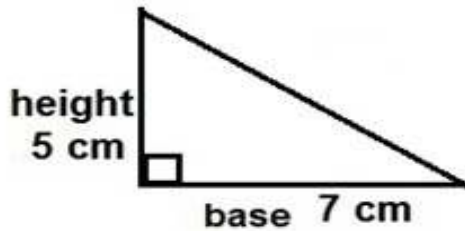
$$A = \frac{1}{2} \times (\text{base} \times \text{height})$$

A is the area, b is the length of the base, h is the height.

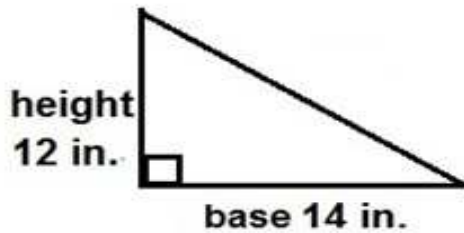
Find the area of each triangle worksheet 4 answers



$$\text{Area} = 15 \text{ cm}^2$$



$$\text{Area} = 17.5 \text{ cm}^2$$



$$\text{Area} = 84 \text{ inch}^2$$