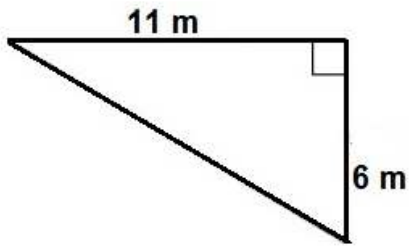
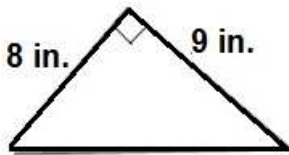


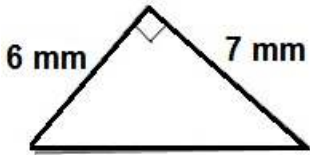
Find the area of each triangle worksheet 6



Area= \_\_\_\_\_



Area \_\_\_\_\_

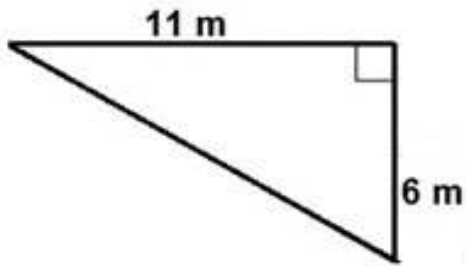


Area \_\_\_\_\_

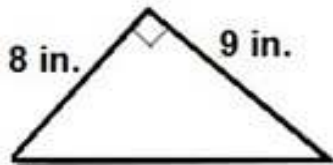
$$A = \frac{1}{2} \times (\text{base} \times \text{height})$$

A is the area, b is the length of the base, h is the height.

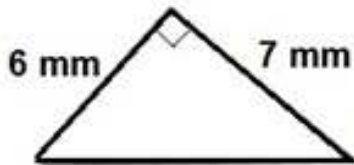
Find the area of each triangle worksheet 6 answers



Area = 33 m<sup>2</sup>



Area = 36 inch<sup>2</sup>



Area = 21 mm<sup>2</sup>