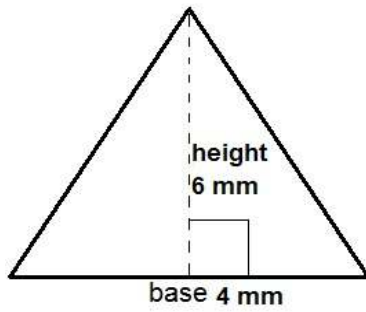
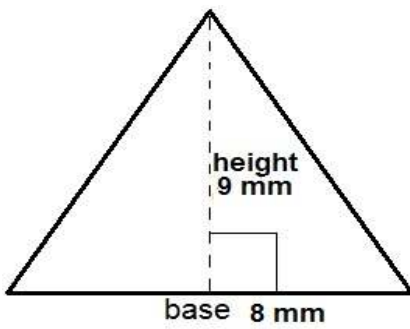


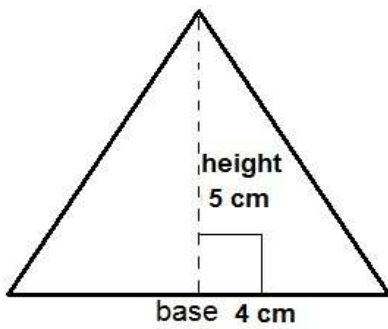
Find the area of each triangle worksheet 2



Area= \_\_\_\_\_



Area \_\_\_\_\_

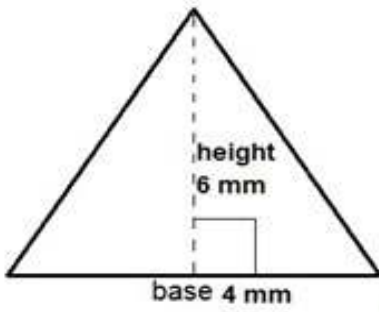


Area \_\_\_\_\_

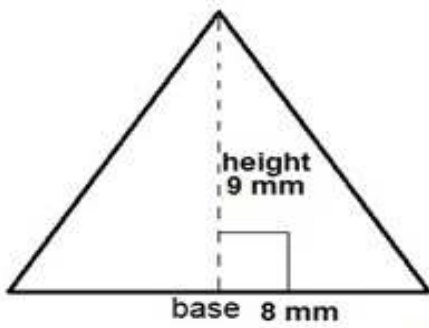
$$A = \frac{1}{2} \times (\text{base} \times \text{height})$$

A is the area, b is the length of the base, h is the height.

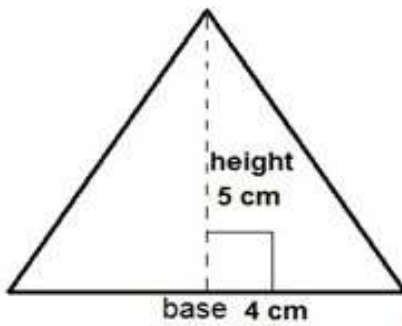
Find the area of each triangle worksheet 2 answers



Area = 12 mm<sup>2</sup>



Area 36 mm<sup>2</sup>



Area 10 cm<sup>2</sup>