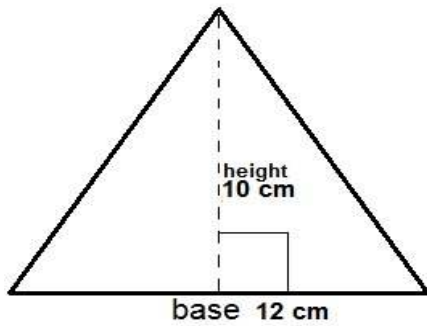
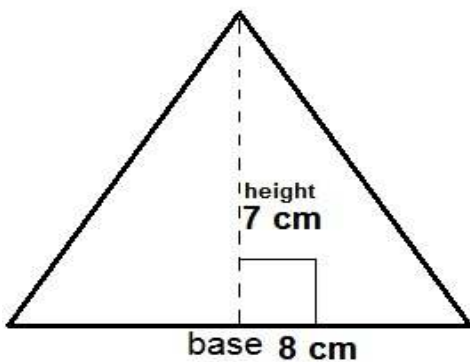


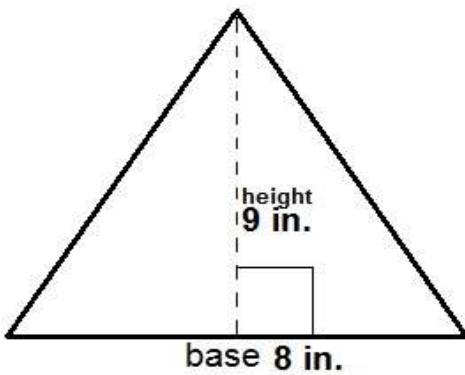
Find the area of each triangle worksheet 1



Area= _____



Area _____

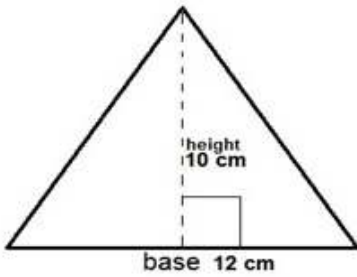


Area _____

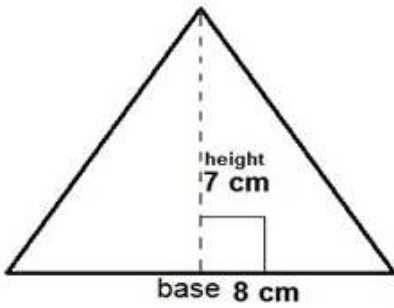
$$A = \frac{1}{2} \times (\text{base} \times \text{height})$$

A is the area, b is the length of the base, h is the height.

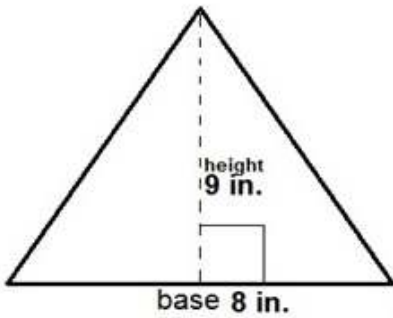
Find the area of each triangle worksheet 1 answers



Area = 60 cm²



Area 28 cm²



Area 36 cm²

$$A = \frac{1}{2} \times (\text{base} \times \text{height})$$

A is the area, b is the length of the base, h is the height.