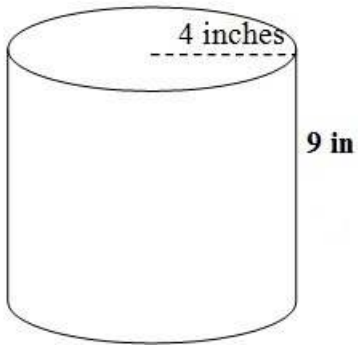
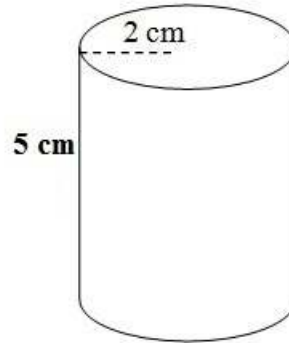


# Find the surface area of each cylinder

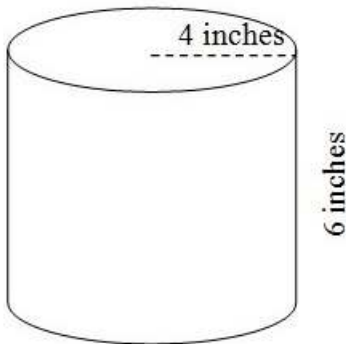
worksheet 1



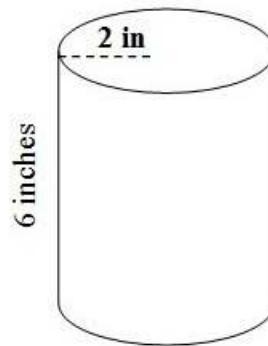
surface area = \_\_\_\_\_



surface area = \_\_\_\_\_



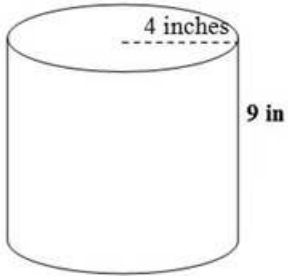
surface area = \_\_\_\_\_



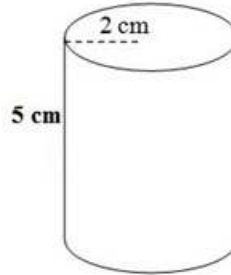
surface area = \_\_\_\_\_

# Find the surface area of each cylinder

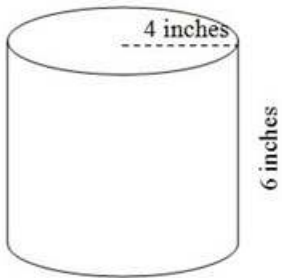
worksheet 1 answers



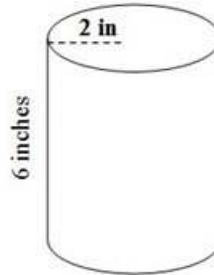
surface area =  $326.56 \text{ in}^2$



surface area =  $87.92 \text{ cm}^2$



surface area =  $251.2 \text{ in}^2$



surface area =  $100.48 \text{ in}^2$