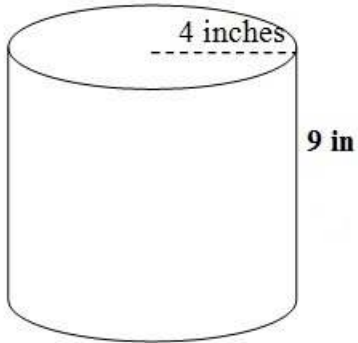
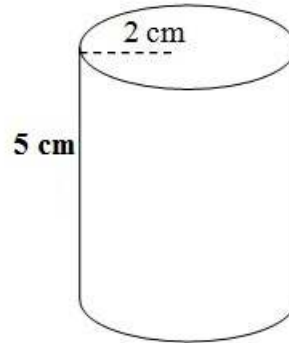


Find the volume of each cylinder

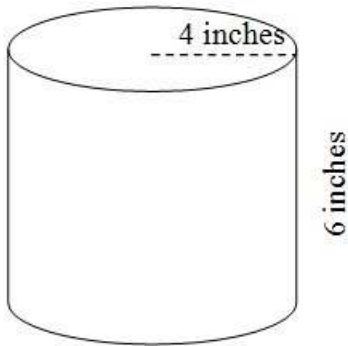
worksheet 1



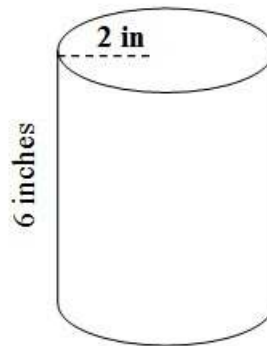
V = _____



V = _____



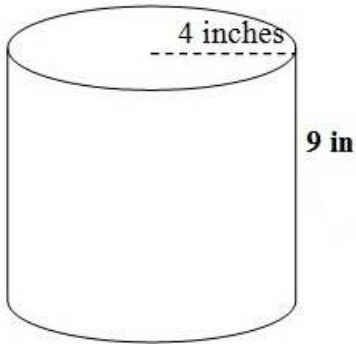
V = _____



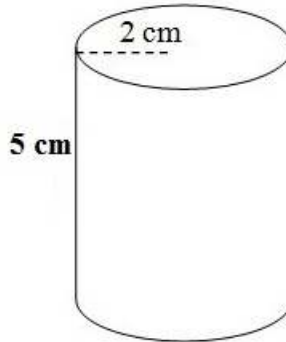
V = _____

Find the volume of each cylinder

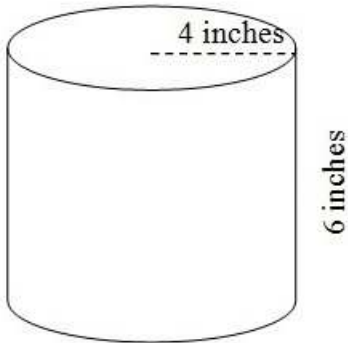
worksheet 1 answers



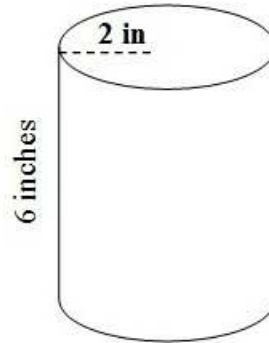
$$V = \underline{452.16 \text{ cubic in}}$$



$$V = \underline{62.8 \text{ cubic cm}}$$



$$V = \underline{301.44 \text{ in}^3}$$



$$V = \underline{75.36 \text{ in}^3}$$