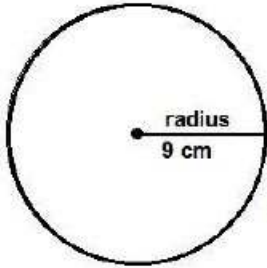
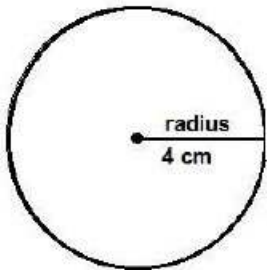


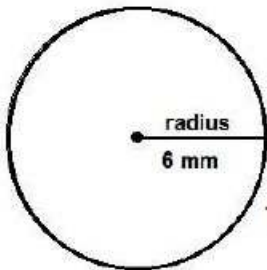
Find the area of the circles . 2



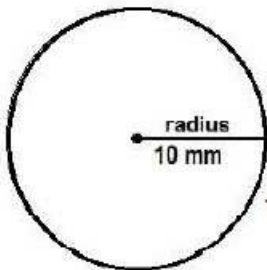
The area of this circle is _____



The area of this circle is _____



The area of this circle is _____



The area of this circle is _____

Find the area of the circles - 2 worksheet answers

