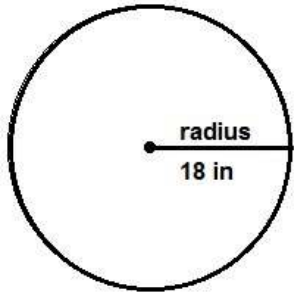
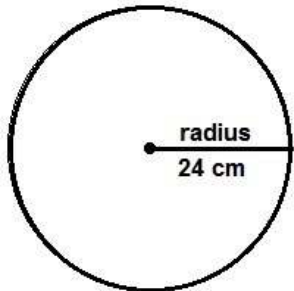


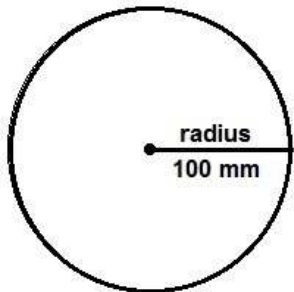
Find the circumference -1



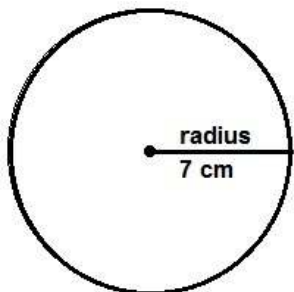
The circumference of this circle is _____



The circumference of this circle is _____

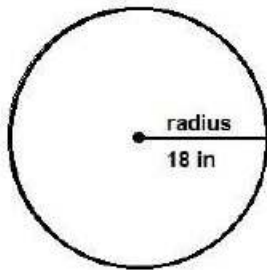


The circumference of this circle is _____

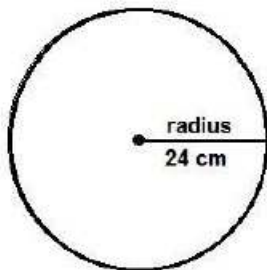


The circumference of this circle is _____

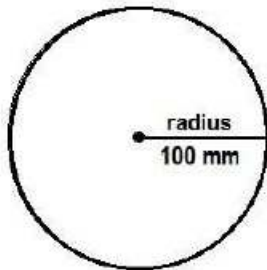
Find the circumference – 1 worksheet answers



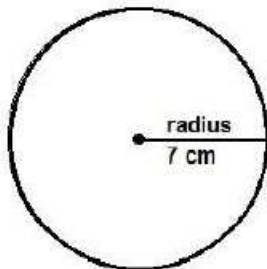
The circumference of this circle is 113.04 in



The circumference of this circle is 150.72 cm



The circumference of this circle is 626 mm



The circumference of this circle is 43.96 cm