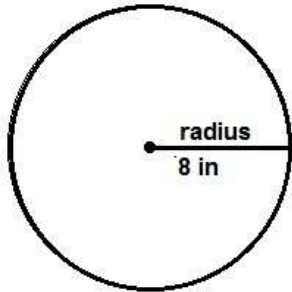
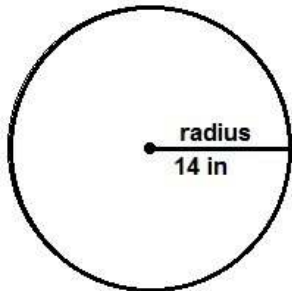


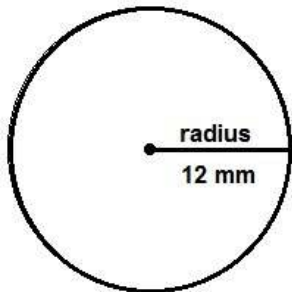
Find the circumference -3



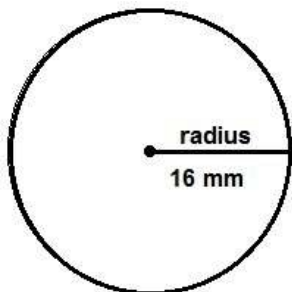
The circumference of this circle is _____



The circumference of this circle is _____

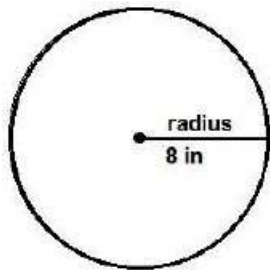


The circumference of this circle is _____

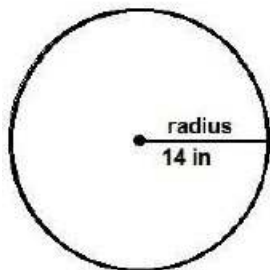


The circumference of this circle is _____

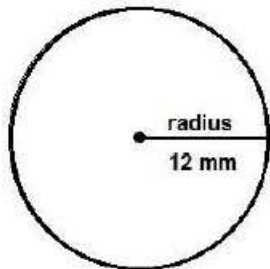
Find the circumference - 3 answers



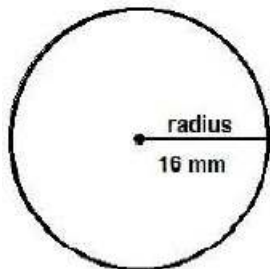
The circumference of this circle is 50.24 in



The circumference of this circle is 87.92 in



The circumference of this circle is 75.36 mm



The circumference of this circle is 100.48 mm