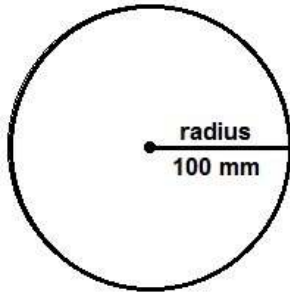
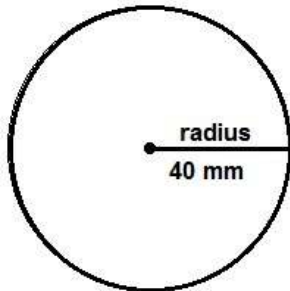


# Find the diameter and circumference - 4



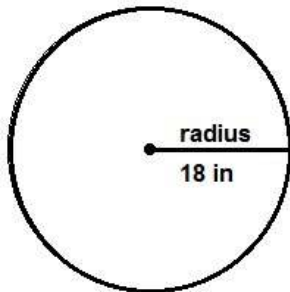
The diameter of this circle is \_\_\_\_\_

The circumference of this circle is \_\_\_\_\_



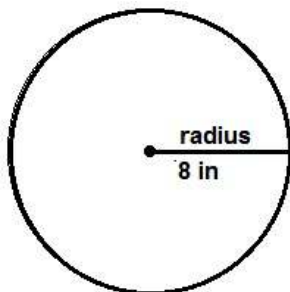
The diameter of this circle is \_\_\_\_\_

The circumference of this circle is \_\_\_\_\_



The diameter of this circle is \_\_\_\_\_

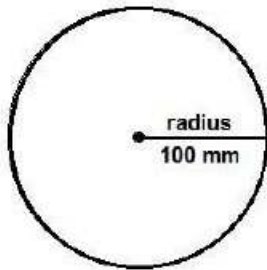
The circumference of this circle is \_\_\_\_\_



The diameter of this circle is \_\_\_\_\_

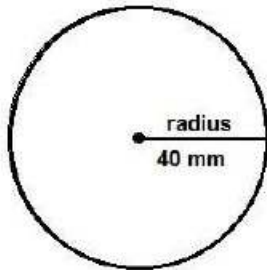
The circumference of this circle is \_\_\_\_\_

Find the diameter and circumference – 4 answers



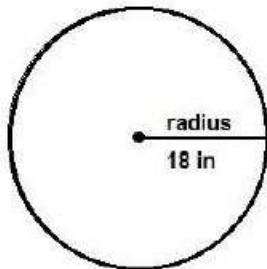
The diameter of this circle is 200mm

The circumference of this circle is 628 mm



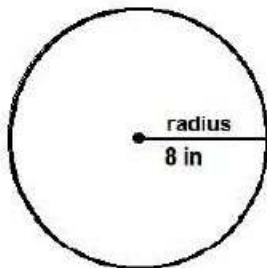
The diameter of this circle is 80 mm

The circumference of this circle is 251.2 mm



The diameter of this circle is 36 in

The circumference of this circle is 113.04 in



The diameter of this circle is 16 in

The circumference of this circle is 50.24 in