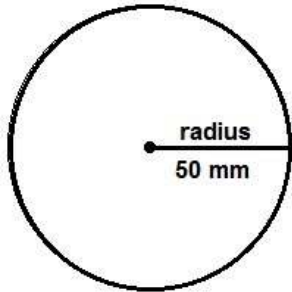
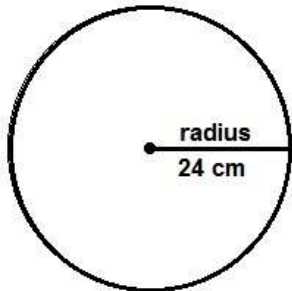


# Find the diameter and circumference - 5

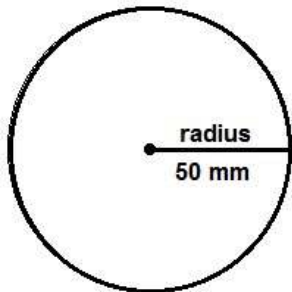


The circumference of this circle is \_\_\_\_\_



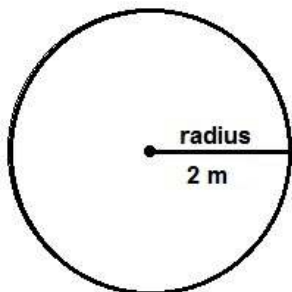
The diameter of this circle is \_\_\_\_\_

The circumference of this circle is \_\_\_\_\_



The diameter of this circle is \_\_\_\_\_

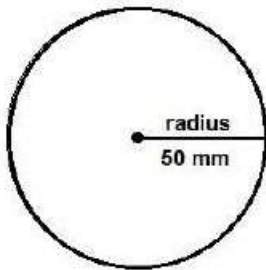
The circumference of this circle is \_\_\_\_\_



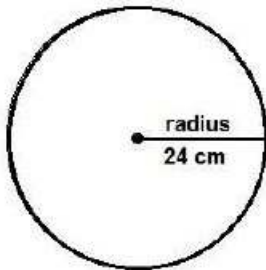
The diameter of this circle is \_\_\_\_\_

The circumference of this circle is \_\_\_\_\_

Find the diameter and circumference – 5 answers

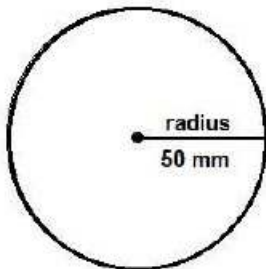


The circumference of this circle is 314 mm



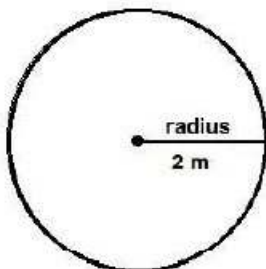
The diameter of this circle is 48 cm

The circumference of this circle is 150.72 cm



The diameter of this circle is 100 mm

The circumference of this circle is 314 mm



The diameter of this circle is 4 m

The circumference of this circle is 12.56 m